

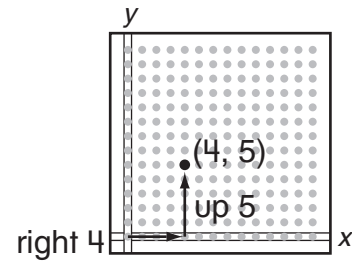
Name \_\_\_\_\_

# Graphing in the First Quadrant



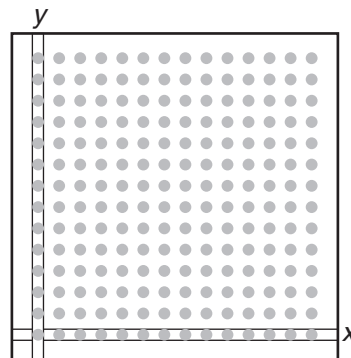
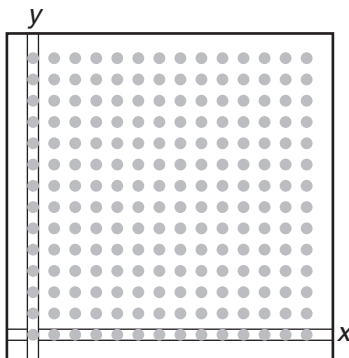
## Try This

- Locate the points on the graphing pegboard.
- Record your answers.
- For problem 5, write the names of the points shown.



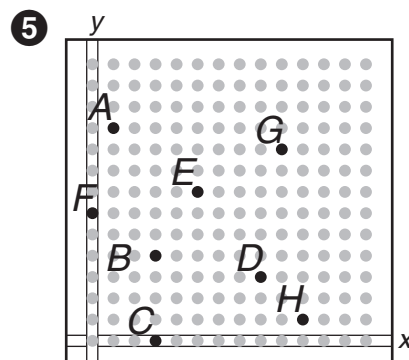
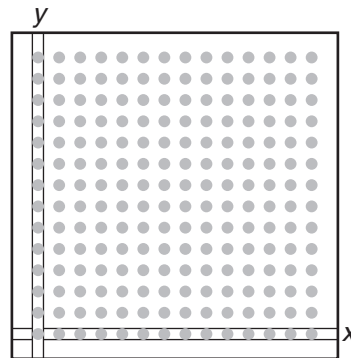
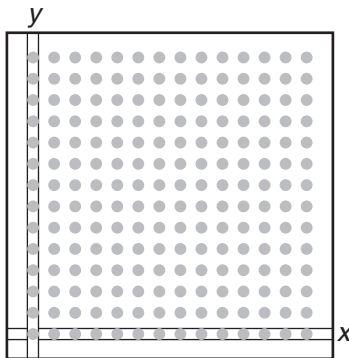
1 Find points  $A(3, 8)$  and  $B(2, 5)$ .

2 Find points  $C(1, 5)$  and  $D(7, 3)$ .



3 Find points  $E(4, 0)$  and  $F(0, 6)$ .

4 Find points  $G(5, 1)$  and  $H(7, 9)$ .



$A =$  \_\_\_\_\_

$B =$  \_\_\_\_\_

$C =$  \_\_\_\_\_

$D =$  \_\_\_\_\_

$E =$  \_\_\_\_\_

$F =$  \_\_\_\_\_

$G =$  \_\_\_\_\_

$H =$  \_\_\_\_\_