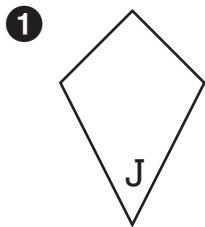


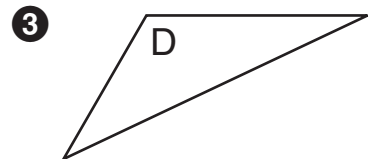
Symmetry

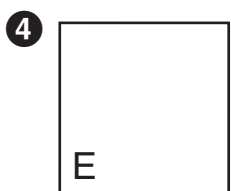
Try This

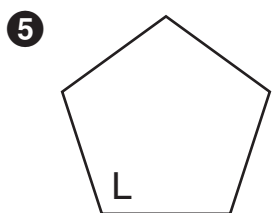
- Use your tracing shapes to draw each shape. Cut it out.
- Fold as many lines of symmetry as you can.
- Draw the lines of symmetry below.
- Write the number of lines of symmetry on the answer line.

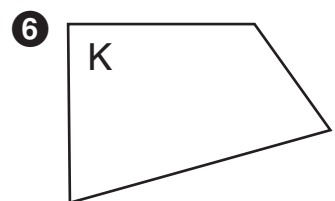












Challenge

Find and draw the lines of symmetry. Tell how many lines of symmetry. Write 0 if there is no line of symmetry.

A D G H I L M Q S T W X
