

Name _____

Perimeter




Perimeter is the distance around.



Try This

- Use Pattern Blocks to build each figure.
- Find its perimeter. Show your work.
- Rearrange the Pattern Blocks to make another figure.
- Find its perimeter. Show your work.

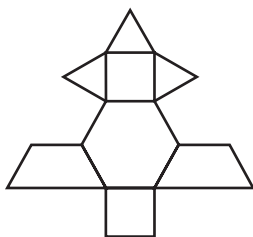
1



Perimeter: _____

Perimeter of my figure: _____

2




Perimeter: _____

Perimeter of my figure: _____

Challenge

Use these Pattern Blocks to make a figure with a perimeter of 10 units. Sketch your figure.



© ETACuisenaire®